

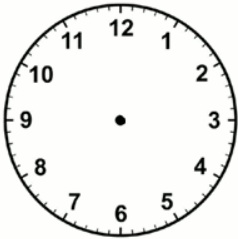
Date: \_\_\_\_\_



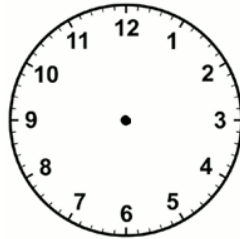
KLP: Draw the hands on a clock to show 5 minute intervals to the hour on an analogue clock

**Do it**

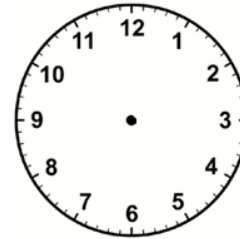
Draw hands on the clock to show:



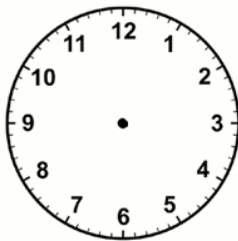
Five to 4



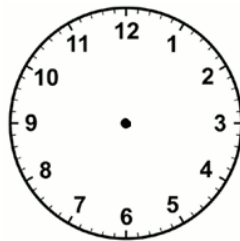
Twenty to 11



Ten to 3



Twenty five to 10



Twenty to 2

**Twist it**

Coco thinks she has drawn hands to show twenty five to 2.



Explain why she is incorrect?

**Solve it**

**Always/Sometimes/Never True**

If one hand is pointing to the 7 then it is 'twenty five to something.'